



CONCEPT DEVELOPMENT

Mathematics Assessment Project
CLASSROOM CHALLENGES
A Formative Assessment Lesson

Finding Equations of Parallel and Perpendicular Lines

Mathematics Assessment Resource Service
University of Nottingham & UC Berkeley
Beta Version

For more details, visit: <http://map.mathshell.org>
© 2012 MARS, Shell Center, University of Nottingham
May be reproduced, unmodified, for non-commercial purposes under the Creative Commons license
detailed at <http://creativecommons.org/licenses/by-nc-nd/3.0/> - all other rights reserved

Finding Equations of Parallel and Perpendicular Lines

MATHEMATICAL GOALS

This lesson unit is intended to help you assess how well students are able to understand the relationship between the slopes of parallel and perpendicular lines and, in particular, to help identify students who find it difficult to:

- Find, from their equations, lines that are parallel and perpendicular.
- Identify and use intercepts.

It also aims to encourage discussion on some common misconceptions about equations of lines.

COMMON CORE STATE STANDARDS

This lesson relates to the following *Standards for Mathematical Content* in the *Common Core State Standards for Mathematics*:

G-PE: Use coordinates to prove simple geometric theorems algebraically.

F-IF: Analyze functions using different representations.

This lesson also relates to the following *Standards for Mathematical Practice* in the *Common Core State Standards for Mathematics*:

1. Make sense of problems and persevere in solving them.
3. Construct viable arguments and critique the reasoning of others.
7. Look for and make use of structure.

INTRODUCTION

The lesson unit is structured in the following way:

- Before the lesson, students work individually on a task designed to reveal their current levels of understanding and their difficulties. You then review their work, and create questions for students to answer in order to improve their solutions.
- During the lesson, students work in small groups on a task related to the assessment task. Next, they re-group to critique each other's work. Throughout this work they justify and explain their decisions to each other.
- In a whole-class discussion, students explain and extend their methods and solutions.
- Finally, students again work individually to improve their solutions to the assessment task.

MATERIALS REQUIRED

- Each student will need two copies of the assessment task *Parallel and Perpendicular Lines*, a mini-whiteboard, pen, and eraser.
- Each small group of students will need a copy of *Card Set: Equations* (already cut up into cards), two copies of the table *Properties*, and a glue stick.
- Graph paper should be kept in reserve, and only used when requested.
- There is a projector resource *Lines and Rectangles* for use during the plenary discussion.

TIME NEEDED

15 minutes before the lesson, a 1-hour lesson, and 10 minutes in the next lesson (or for homework). Timings are approximate and will depend on the needs of the class.

BEFORE THE LESSON

Assessment task: *Parallel and Perpendicular Lines* (15 minutes)

Have students do this task, in class or for homework, a day or more before the formative assessment lesson. This will give you an opportunity to assess the work, and to find out the kinds of difficulties students have with it. Then you will be able to target your help more effectively in the follow-up lesson.

Give each student a copy of the assessment task *Parallel and Perpendicular Lines*. Introduce the task briefly and help the class to understand the problem and its context.

Read through the questions and try to answer them as carefully as you can.

It is important that, as far as possible, students are allowed to answer the questions without your assistance.

Advise your students that they should not worry too much if they cannot understand or do everything, because there will be lesson using a similar task that will help them. Explain that their goal is to be able to answer questions such as these by the end of the next lesson.

Parallel and Perpendicular Lines				
Here are some equations of straight lines:				
$y + 2x = 8$	$2y + \frac{1}{2}x + 1 = 0$	$4y - x = 1$	$y = x - 4$	$y = 2(x - 1)$
$2y = x - 4$	$y + 2x + 2 = 0$	$y = \frac{1}{2}x + 2$	$y = 4 - x$	$2y = 4 - x$

1. Which four lines form the four sides of a rectangle?
Explain your reasoning carefully.

.....

.....

.....

.....

.....

2. Complete the drawing below to show the four lines and the x and y axes.
Label the lines clearly.

Assessing students' responses

Collect students' responses to the task. Make some notes on what their work reveals about their current levels of understanding. The purpose of doing this is to forewarn you of the difficulties students will experience during the lesson itself, so that you may prepare carefully.

We suggest that you do not score students' work. The research shows that this will be counterproductive as it will encourage students to compare their scores, and will distract their attention from what they can do to improve their mathematics.

Instead, help students to make further progress by summarizing their difficulties as a series of questions. Some suggestions for these are given on the next page. These have been drawn from common difficulties observed in trials of this lesson unit.

We suggest that you write your own list of questions, based on your own students' work, using the ideas below. You may choose to write questions on each student's work. If you do not have time to do this, you could write a few questions that will help the majority of students. These can then be displayed on the board at the end of the lesson.

Common issues:**Suggested questions and prompts:**

Student does not link the properties of a rectangle with slopes of lines For example: The student does not mention in Q1 that a rectangle has two pairs of parallel sides and that these pairs are perpendicular, or connect this with the slope of the lines forming the sides.	<ul style="list-style-type: none">• What do you know about the sides of rectangles?• How is the property of being parallel [perpendicular] connected with slope?• Why is looking for slopes of pairs of parallel and perpendicular lines relevant?
Student demonstrates limited understanding of the link between the slope and the form of the equation of a straight line For example: The student identifies slopes for equations in which y is given explicitly in terms of x , $y = mx + b$, but not for other equations. Or: The student reads the number in front of x as if it were the slope in all equations.	<ul style="list-style-type: none">• How do you work out the slope of a line?• How do you work out if two lines are parallel from their slopes? Perpendicular?• Some equations are written with y isolated and others aren't. How does this affect how you calculate the slope?
Student reasoning is insufficient For example: In Q1 the student does not explain how looking for parallel and perpendicular lines relates to the task of finding the sides of the rectangle.	<ul style="list-style-type: none">• Why is looking for slopes of pairs of parallel and perpendicular lines relevant?• How do you know that...? Explain your reasoning.
Student does not identify relevant information from the equations For example: The student fails to identify the x - and/or y -intercepts in Q2.	<ul style="list-style-type: none">• What else can you figure out from the equations of the lines?• Where does a pair of lines intersect?• Where does a line intersect the x-axis?• Where does a line intersect the y-axis?

SUGGESTED LESSON OUTLINE

Interactive introduction (5–10 minutes)

These introductory questions are designed to give you a greater insight into students' misconceptions, and are not intended to form a whole-class discussion. The questioning of students should be fast paced and should act as a means of stimulating students to think about the equations of parallel and perpendicular lines.

Today we're going to be looking at slopes and the equations of parallel and perpendicular lines.

I am going to ask you a series of questions. I would like you to write your answers on your whiteboards.

You may wish to draw a diagram if that helps.

Give each student a mini-whiteboard, pen, and eraser.

What is the slope of the line joining the points (2,5) and (7,15)? [2]

Show me the coordinates of two points for which the slope of the line between them is 3. [E.g. (1,4) and (3,10).]

Give me an equation of a line with a slope of 3. [E.g. $y = 3x + 1$.]

Keeping your equation on your whiteboard, write it in a different way. [E.g. $y - 3x = 1$.]

What is the y-intercept of the line $y = 3x + 7$? [(0, 7).]

What is the x-intercept of the line $2y = 3x - 6$? [(2, 0).]

Show me the equation of a line that is parallel to $y = 2x + 4$. [E.g. $y = 2x - 6$.]

What would be the slope of a line perpendicular to $y = 2x + 4$? [$-\frac{1}{2}$.]

Show me the equations of two lines that are perpendicular to each other. [E.g. $y = 2x + 4$ and $y = -\frac{1}{2}x + 4$.]

During this activity you will be able to identify common misconceptions within the group; this will help you to target groups of students effectively during the collaborative group work.

Collaborative group work: matching task (20 minutes)

Ask students to work in pairs or groups of three and give each small group a copy of the *Card Set: Equations* (already cut up) and two copies of the *Properties* sheet.

Introduce the activity:

Find two Equations cards to match each of the Properties.

You may want to spend some time thinking about the equations first. It might be helpful to figure out some extra information, and write it on the cards.

Once you have found two Equations cards that match a Property, explain to your partners how you came to your decision. If your partners agree, they should explain your reasoning in their own words. If they disagree, they should explain why they think you are incorrect.

In your group you need to be able to agree on and explain the placement of every card.

The purpose of this structured group work is to make students engage with each other's explanations and take responsibility for each other's understanding.

You have two tasks during the small-group work: to note aspects of the task students find difficult, and to support students' reasoning.

Note aspects of the task that students find difficult

For example, students may begin by working with the mathematics they understand best, and get stuck on later categorizations. You can use information about particular difficulties to focus whole-class discussions towards the end of the lesson.

Support students' reasoning

Try not to make suggestions that move students towards a particular categorization. Instead, ask questions to help students to reason together.

How can you determine the slope for any equation? Is there a form of the equation that makes this easier?

How do you find the x -intercept from a written equation?

If you cannot place all the cards, you may need to rethink some of your categorizations.

If you find one student has produced a solution for a particular card or match, challenge the other students in the group to provide an explanation.

Jenny matched these cards parallel to each other. Jonathon, why does Jenny think these lines are parallel?

If several students in the class are struggling with the same issue, you could write a relevant question on the board.

A few minutes before the end of the activity, ask one student from each group to write the equations they have succeeded in categorizing onto one copy of the *Properties* sheet.

Once they have done this, ask each small group of students to join with another group, taking with them their *Properties* sheet with equations written on them.

It may be advisable to group students who have displayed a similar level of competence on the task, thus allowing for a richer discussion.

Give each group a glue stick.

In your new groups, decide whether or not you agree with each other's answers.

If your new partners disagree with your answer, explain your reasoning to them, and let them explain why they disagree.

Once you are all comfortable with your answers and can explain your reasoning, glue the Equation cards into place on the blank copy of the properties sheet.

If students finish early, you may want to ask them to invent an additional equation for each category, using the blank cards. Alternatively, they could create a new heading for the empty box on the *Properties* sheet, and write a pair of possible equations for their own choice of category.

Whole-class discussion (15 minutes)

Organize a whole-class discussion.

First spend about 5 minutes considering categorizations and any discrepancies found among the groups.

After you changed groups, did your new partners disagree with any of your answers? Give me an example of an equation or pair of equations on which you disagreed. What was the misconception?

Can you explain your reasoning for the final categorization?

Did any other group have different reasoning or categorize those equations under a different heading?

Then spend about 10 minutes generalizing the mathematics students worked on during the lesson.

Display slide P-1, *Lines and Rectangles*. Tell students that the line segment SP has equation $y = 2x + 3$.

In your groups I want you to decide on a possible equation for each of the line segments PQ, QR, and RS.

Once you are all in agreement, write your equations on your whiteboards and show them to me.

Give students a couple of minutes to come up with a possible solution. Then select an equation from each group and discuss whether or not it is a correct possible solution, focusing on why this is the case.

Improve individual responses to the assessment task (10 minutes)

Some teachers choose to set this task as homework if there is not enough time in the lesson.

Return students' original assessment tasks, along with a second, blank copy of the task sheet.

Look at your original responses and think about what you learned this lesson.

Using what you have learned, try to improve your work.

If students are satisfied with their solutions, ask them to write down a general method for finding the equations of lines that form a rectangle.

SOLUTIONS

Assessment Task: Parallel and Perpendicular Lines

Question 1. Students may first put the equation into the form $y = mx + b$ and look for m , the slope.

$y + 2x = 8$ $y = -2x + 8$ Slope = -2	$2y + \frac{1}{2}x + 1 = 0$ $y = -\frac{1}{4}x - \frac{1}{2}$ Slope = $-\frac{1}{4}$	$2y + x = 1$ $y = -\frac{1}{2}x + \frac{1}{2}$ Slope = $-\frac{1}{2}$	$y = x - 4$ Slope = 1	$y = 2(x - 1)$ $y = 2x - 2$ Slope = 2
$2y = x - 4$ $y = \frac{1}{2}x - 2$ Slope = $\frac{1}{2}$	$y + 2x + 2 = 0$ $y = -2x - 2$ Slope = -2	$y = \frac{1}{2}x + 2$ Slope = $\frac{1}{2}$	$y = 4 - x$ $y = -x + 4$ Slope = -1	$2y = 4 - x$ $y = -\frac{1}{2}x + 2$ Slope = $-\frac{1}{2}$

The slopes of parallel lines are equal. The product of the slope of a line and its perpendicular is -1 .

These pairs of lines are parallel: $y + 2x = 8$ and $y + 2x + 2 = 0$

$$2y = x - 4 \text{ and } y = \frac{1}{2}x + 2$$

$$2y + x = 1 \text{ and } 2y = 4 - x$$

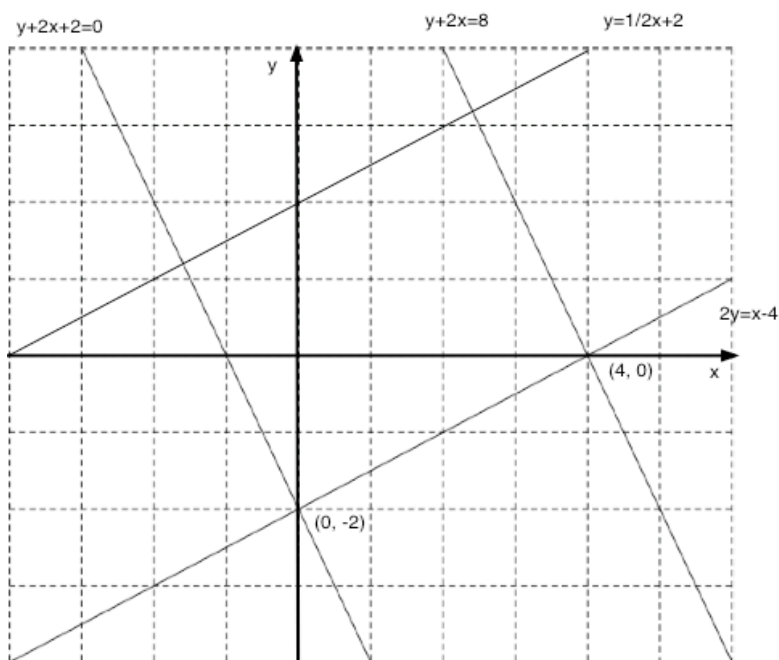
Lines $y + 2x = 8$ and $y + 2x + 2 = 0$ are perpendicular to $2y = x - 4$ and $y = \frac{1}{2}x + 2$ so these form a rectangle.

Question 2. Lines $y + 2x = 8$ and $y + 2x + 2 = 0$ have a negative slope, so they are the parallel pair shown on the diagram.

Lines $2y = x - 4$ and $y = \frac{1}{2}x + 2$ have a positive slope so either $2y = x - 4$ or $y = \frac{1}{2}x + 2$ is the line that is missing.

The y intercepts of lines $2y = x - 4$ and $y + 2x + 2 = 0$ are the same so these lines cross and intercept the y -axis at the point $(0, -2)$.

Line $y = \frac{1}{2}x + 2$ can be positioned by finding the line that is parallel to $2y = x - 4$ that passes through $(0, 2)$ (y -intercept).



Collaborative work: *Equations and Properties* task

<p>These lines are parallel</p> $2y = 8x + 3$ $y = 4x + 4$	<p>These lines are perpendicular</p> $4y = x + 3$ $y + 4x + 6 = 0$
<p>These lines have the same y-intercept</p> $y = 6x - 4$ $2y + 8 = 3x$	<p>These lines have the same x-intercept</p> $3y = 2x - 8$ $2y + x = 4$
<p>These lines go through the point $(1,5)$</p> $y + 6x = 11$ $y = 8x - 3$	

Parallel and Perpendicular Lines

Here are some equations of straight lines:

$y + 2x = 8$	$2y + \frac{1}{2}x + 1 = 0$	$4y - x = 1$	$y = x - 4$	$y = 2(x - 1)$
$2y = x - 4$	$y + 2x + 2 = 0$	$y = \frac{1}{2}x + 2$	$y = 4 - x$	$2y = 4 - x$

1. Which four lines form the four sides of a rectangle?

Explain your reasoning carefully.

.....

.....

.....

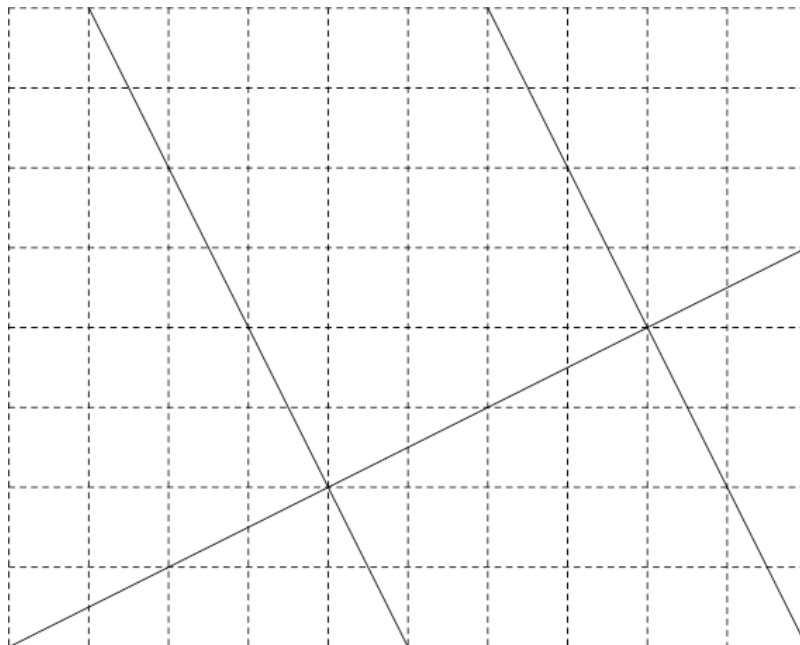
.....

.....

.....

2. Complete the drawing below to show the four lines and the x - and y -axes.

Label the lines clearly.



Card Set: Equations

	$4y = x + 3$
$y = 8x - 3$	$y + 4x + 6 = 0$
$3y = 2x - 8$	$y + 6x = 11$
$2y + 8 = 3x$	$2y + x = 4$
$2y = 8x + 3$	$y = 6x - 4$

Properties

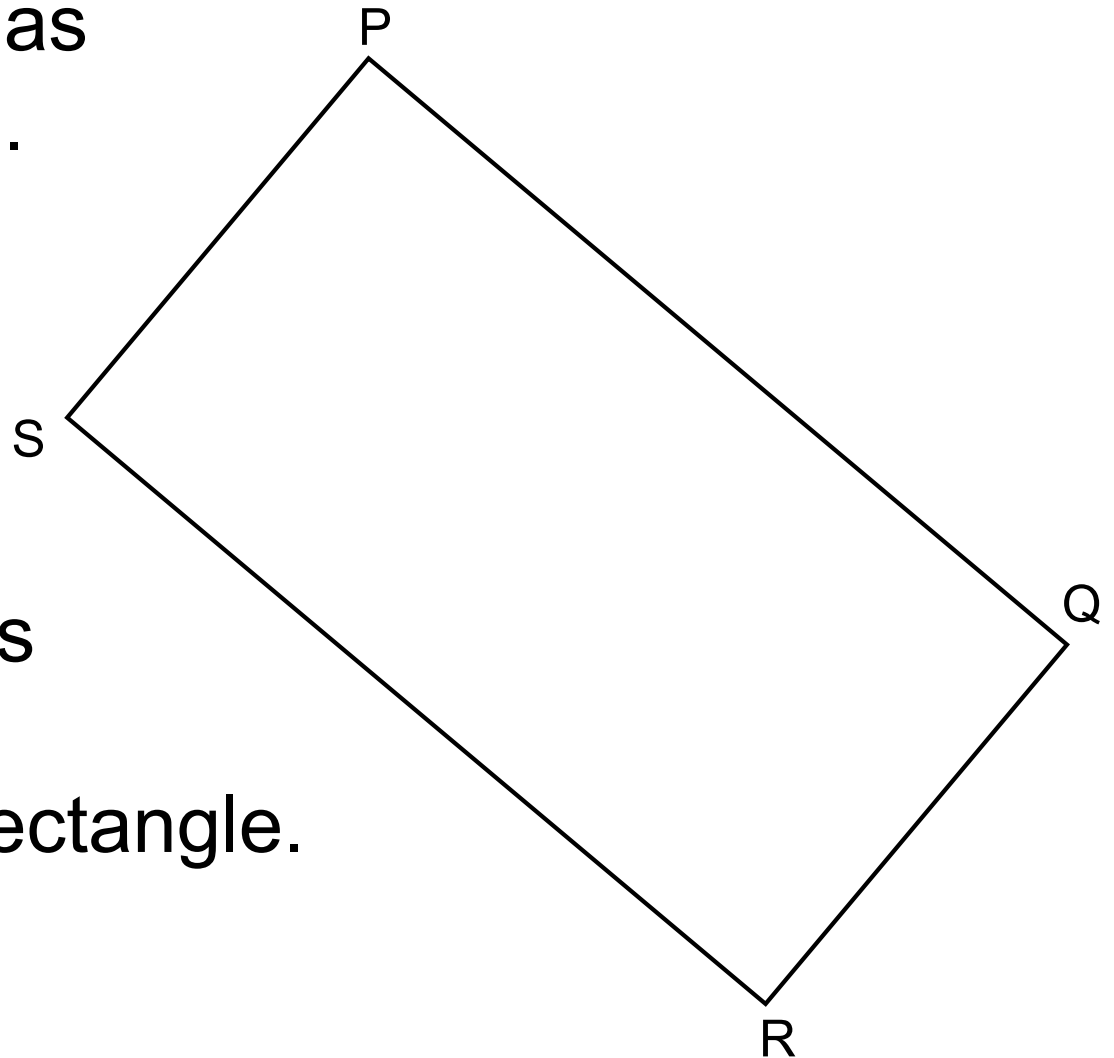
These lines are parallel	These lines are perpendicular
These lines have the same y-intercept	These lines have the same x-intercept
These lines go through the point (1,5)	

S

Lines and Rectangles

Line segment SP has equation $y = 2x + 3$.

Find the equations of the line segments forming the other three sides of the rectangle.



Mathematics Assessment Project

CLASSROOM CHALLENGES

This lesson was designed and developed by the
Shell Center Team
at the
University of Nottingham
Malcolm Swan, Nichola Clarke, Clare Dawson, Sheila Evans
with
Hugh Burkhardt, Rita Crust, Andy Noyes, and Daniel Pead

It was refined on the basis of reports from teams of observers led by
David Foster, Mary Bouck, and Diane Schaefer
based on their observation of trials in US classrooms
along with comments from teachers and other users.

This project was conceived and directed for
MARS: Mathematics Assessment Resource Service
by
Alan Schoenfeld, Hugh Burkhardt, Daniel Pead, and Malcolm Swan
and based at the University of California, Berkeley

We are grateful to the many teachers, in the UK and the US, who trialed earlier versions
of these materials in their classrooms, to their students, and to
Judith Mills, Carol Hill, and Alvaro Villanueva who contributed to the design.

This development would not have been possible without the support of
Bill & Melinda Gates Foundation
We are particularly grateful to
Carina Wong, Melissa Chabran, and Jamie McKee

© 2012 MARS, Shell Center, University of Nottingham
This material may be reproduced and distributed, without modification, for non-commercial purposes,
under the Creative Commons License detailed at <http://creativecommons.org/licenses/by-nc-nd/3.0/>
All other rights reserved.
Please contact map.info@mathshell.org if this license does not meet your needs.